



# MODERNAGE


## ABBOTTABAD - PAKISTAN

*A place to flourish, thrive & shine*

### WINTER HOMEWORK



# Grade II



Website: [www.maps.edu.pk](http://www.maps.edu.pk)

**Modernage Public School & College, Abbottabad**  
**Homework for Winter Break Class Two**  
**Session 2024 – 25**

**Dear Parents/Guardians**

Finally, Winter is here, signaling the end of the Academic session 2023 and start of a winter break.

We take great pleasure in announcing the successful culmination of the academic session 2023. Observing the continuous development and advancement of your child has been a source of immense satisfaction. To foster ongoing engagement with education during the holiday period, we are providing a comprehensive work pack comprising a multitude of enjoyable tasks and intellectually stimulating activities. Thank you for being an integral partner in your child's education. We eagerly anticipate another year of mutual growth and learning.

**Dear Modernites!**

Reflect on the achievements and lessons learned during the previous academic session. Complete the assigned exercises in your respective subjects, embracing the knowledge gained. Take a moment to chill and recharge during this winter break. Use the new year as a fresh start for academic goals and personal growth. Ensure neatness and organization in your work. We hope that you have cheerful and safe Winter vacation with your families.

The school will remain closed for winter vacation from **Sun, 24<sup>th</sup> December, 2023 till Sun 03<sup>rd</sup> March, 2024** and reopen on **Mon 04<sup>th</sup> March, 2024 In Sha Allah.**

Submit the completed assignment till 10<sup>th</sup> March 2024.

Looking forward to your cooperation. A copy of this homework is also available at the official webpage [www.maps.edu.pk](http://www.maps.edu.pk), the portal and app of Modernage.

**Best Regards**

**Academic Coordinator**

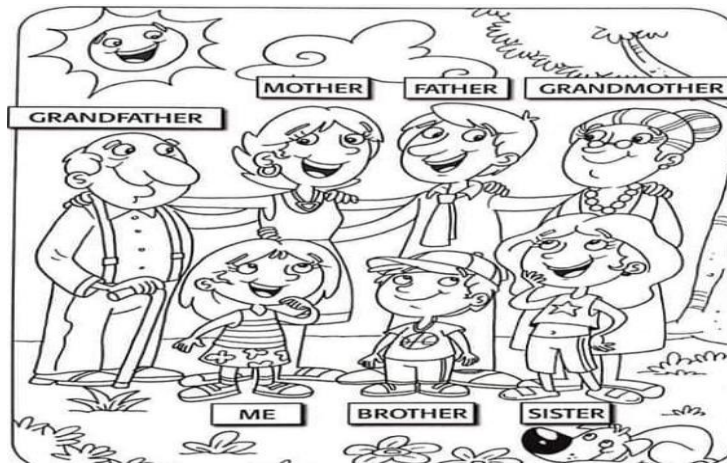
Happy New Year.

**Note:** Certificates will be awarded for extra ordinary efforts and complete homework. Each task carries 10 marks. Please use loose sheets for your assignments.

**Note for the Students:**

1. Read at least 2 story books of English and Urdu to enhance the reading skills and write their central idea. Write at least 50 new words from the story books that you have read.
2. Recite any poem with action from your book, make a video and share with your teacher.
3. Learn and write multiplication tables from 2 – 10 up to 12 times. Write each table 3 times on loose sheets.
4. In class three, you will be learning cursive handwriting. Start its practice in the winter vacations. Write one page daily according to the guidelines given in the following YouTube channel: [https://youtu.be/6W4cfuvwsg0?si=LsubKr\\_viBn1CQPX](https://youtu.be/6W4cfuvwsg0?si=LsubKr_viBn1CQPX)

1. Draw and describe your dream winter wonderland.
2. Interview task: Ask your family members about their favourite things, then write sentences and colour the given picture.




3. Create a mini dictionary with new words you have learned this year.
4. What toy would you like to get as a present on your birthday? Describe the toy as you imagine it should be. Be sure to include its colour, material, size and anything else you can think of.
5. Describe the picture given below.




6. Antonyms are words that have the opposite meanings. Change the underlined word to its antonym.
  - i. I have a big dog.
  - ii. This book was expensive.
  - iii. The test was easy.
  - iv. She has a new car.
  - v. It's a rare stone.
  - vi. This apple is too sweet.
  - vii. He won the competition.
  - viii. My father is very tall.



7. Sometimes, we feel sad. Think of the things that make you sad. What do you do when you feel sad? Write about it. Also write about a time when something or someone makes you really happy.
8. Do you remember the last Eid? Write all about how you spent that day. Make a list of things you like your mother to cook for you on Eid?



9. Write a story with the help of given pictures.



### Spelling Bee List

aboriginal	confidence	hesitate	plaster	thunder	fighter
activist	creature	hobby	population	tickle	germinate
alien	cupboard	identical	promise	transplant	ingredients
alligator	curious	impatient	quantity	tummy	patriotism
annoyed	discover	imperfect	correct	un crewed	adjective
ashamed	distrust	impolite	reassure	un friendly	efficient
audition	repaired	inactive	reception	particle	messenger
average	encourage	impossible	recovery	unhealthy	technology
baddy	engineer	inactive	rhinoceros	bamboo	founder
balloon	eyebrow	incomplete	rubbish	unpopular	Christianity
blast	abilities	incorrect	sandwich	untidy	honesty
paragraph	ceremony	inelegant	satellite	portion	magazines
breeze	fable	inexpensive	sensitive	warning	increases
bride	faint	informal	session	weight	stammer
bubble	feather	invitation	slipper	whistle	pentagon
button	film director	kangaroo	slogan	wrinkle	astronaut
conflict	firewood	kidney	splash	wrinkly	historic
cabin	floorboard	koala bear	sprain	zebra	blizzard
ceiling	fossil	leather	squid	earthworm	citizen
celebration	freezer	leopard	storage	volunteer	rabies
cement	friendliness	limousine	strike	vaccination	tuberculosis
cheetah	geography	manner	studio	angiosperm	lakes
century	giraffe	misread	surface	porridge	burrow
climate	groom	operation	swallow	irrigation	stigma
coach	haunt	originally	swiftly	invader	nudge
creak	headache	panther	tablet	monument	skeleton
farmer	autumn	surprise	hospital	opinion	naughty
cabbage	support	system	cluster	effort	plumber
greetings	absence	fashion	passenger	butcher	mistake

سوال نمبر ۱۔ ایسی کون سی دعائیں ہیں جو آپ اللہ تعالیٰ سے مانگتے ہیں اور چاہتے ہیں کہ جلدی قبول ہو جائیں۔  
چند جملوں میں بیان کریں۔

سوال نمبر ۲۔ حضرت محمدؐ کی زندگی کے بارے میں آٹھ جملے تحریر کریں۔

سوال نمبر ۳۔ انٹرنیٹ انسان کے لئے فائدہ مند ہے یا نقصان دے؟ دس نکات تحریر کریں۔

سوال نمبر ۴۔ آپ بڑے ہو کر کیا کرنا چاہتے ہیں اور کیوں؟ دس مربوط جملوں میں لکھیں۔

سوال نمبر ۵۔ درج ذیل الفاظ کے متضاد لکھیں۔

نیا، نزدیک، اوپر، آزادی، امانت، اصل، امیر، خوبصورت، دُور، آسمان۔

سوال نمبر ۶۔ اسکول سے واپسی کے وقت آپ مختلف پیشوں سے وابستہ جن لوگوں کو دیکھتے ہیں ان میں سے دو

پیشیوں کے متعلق لکھیں۔

سوال نمبر ۷۔ درج ذیل الفاظ کے مؤنث لکھیں۔

درزی، راجا، بیل، چڑا، کبوتر، شاعر، خادم، باورچی، شیر

سوال نمبر ۸۔ قومی ترانہ زبانی یاد کریں۔

سوال نمبر ۹۔ درج ذیل بے ترتیب الفاظ کو ترتیب دے کر با معنی جملے بنائیں۔

۱۔ ہے۔ جانا۔ مجھے۔ اسکول۔

جملہ:

۲۔ ہے۔ وہ۔ اچھی۔ لڑکی۔

جملہ:

۳۔ رہنا۔ چاہیے۔ صاف۔ ہمیشہ۔

جملہ:

۴۔ ہے۔ خط۔ اس۔ نے۔ لکھا۔

جملہ:

۵۔ رہا۔ ہے۔ وہ۔ کرکٹ۔ کھیل۔

جملہ:

۶۔ دوست - ہے - وہ - میرا۔

جملہ:

۷۔ ہے - بارش - تیز - بہت - ہو - رہی۔

جملہ:

۸۔ اسے - ملا - انعام - آج - ہے۔

جملہ:

۹۔ کرنے - چاہئیں - اچھے - ہمیں - کام۔

جملہ:

۱۰۔ رکھی - کتابیں - میز - پر - ہیں۔

جملہ:

سوال نمبر ۹۔ ان جملوں کو پڑھیے اور ان کا زمانہ پہچان کر سامنے دی گئی خالی جگہ میں لکھیے۔

زمانہ	جملہ
	تم کتاب پڑھ رہی ہو۔
	اتوار کو امتحان ہوگا۔
	میں چہل قدمی کر رہی ہوں۔
	ہم کہانی سن رہے ہیں۔
	دادا جان اسلام آباد گئے تھے۔
	کل لاہور میں بارش ہوگی۔
	وہاج کل آئے گا۔
	میں نے سبق یاد کیا تھا۔

**1. Fill in the missing numbers**

i.  $4 \times 5 =$       ii.  $\_\_ \times 4 = 28$       iii.  $6 \times \_\_ = 18$       iv.  $3 \times \_\_ = 21$       v.  $8 \times \_\_ = 48$   
vi.  $9 \times \_\_ = 54$       vii.  $7 \times 9 =$       viii.  $5 \times 0 = \_\_$

**2. Divide the numbers.**

i.  $16 \div 2$     ii.  $27 \div 3$     iii.  $4 \div 4$

iv.  $5 \overline{)30}$     v.  $6 \overline{)54}$     vi.  $8 \overline{)72}$     vii.  $7 \overline{)63}$

**3. Draw and name the given fractions and represent them by colouring.**

$\frac{4}{5}$        $\frac{5}{6}$        $\frac{9}{10}$        $\frac{2}{9}$        $\frac{5}{7}$

**4. Convert the following.**

$6\text{m} = \_\_ \text{cm}$        $3\text{m } 96\text{cm} = \_\_ \text{cm}$        $4000\text{m} + 100\text{cm} = \_\_ \text{cm}$

$1\text{L} = \_\_ \text{ml}$       how many g in  $8\text{kg} = \_\_ \text{g}$

**5. Fill in the blanks**

- i. There are \_\_\_\_\_ hours in a day.
- ii. There are \_\_\_\_\_ weeks and \_\_\_\_\_ days in a year.
- iii. The 9<sup>th</sup> Islamic month is \_\_\_\_\_
- iv. The month \_\_\_\_\_ is between Rajab and Ramadan.
- v. \_\_\_\_\_ is the month which has the least number of days.
- vi. A cone has \_\_\_\_\_ edges and \_\_\_\_\_ corners.
- vii. A cuboid has \_\_\_\_\_ edges.

**6. Do as directed.**

- i. How many tens are there in 48? \_\_\_\_\_
- ii. Write seventy-five as a numeral. \_\_\_\_\_
- iii. Write 84 in words. \_\_\_\_\_
- iv.  $69 =$  \_\_\_\_\_ tens + \_\_\_\_\_ ones.
- v. 70 comes after \_\_\_\_\_
- vi. 52 comes before \_\_\_\_\_
- vii. One less than 83 is \_\_\_\_\_
- viii. One more than 49 is \_\_\_\_\_
- ix.  $8 + 12$  is \_\_\_\_\_
- x.  $25 - 5$  is \_\_\_\_\_



**7. Use the calendar to answer the questions:**

NOVEMBER						
MONDAY	TUESDAY	WEDNESDAY	THURSDAY	FRIDAY	SATURDAY	SUNDAY
				1	2	3
4	5	6 ELECTION DAY	7	8	9	10 FOOTBALL GAME
11	12	13	14	15	16	17
18	19 SPORTS DAY	20	21	22 EID DAY	23	24
25	26	27	28	29	30	

- i. What month is shown above? \_\_\_\_\_
- ii. How many days are in this month? \_\_\_\_\_
- iii. Which day of the week is the first day of the month? \_\_\_\_\_
- iv. How many days are in a fifth week? \_\_\_\_\_
- v. How many Tuesdays are in this month? \_\_\_\_\_
- vi. What day of the week is the Eid day? \_\_\_\_\_
- vii. What is the date of the sports day? \_\_\_\_\_
- viii. What day of the week is Election Day? \_\_\_\_\_

**8. Name the shapes by looking at the given hints.**

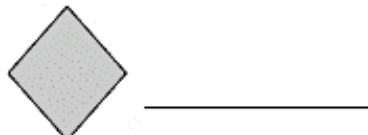
Triangles ---> 3 sides

Quadrilaterals ---> 4 sides

Pentagon ---> 5 sides

Hexagon ---> 6 sides

Example:  triangle



## 9. Do as directed.

1. Add.




$$2 + 3 = \underline{\quad}$$

2. Subtract.



$$4 - 3 = \underline{\quad}$$

3. Use the ten frames.



\_\_\_ tens \_\_\_ ones

4. Circle the greatest number.

4    5    6

5. Is 5 odd or even?



odd    even


6. Fill in the missing number.

$$4 + \square = 6$$

7. What is missing?

+, -, =

$$2 \square 3 = 5$$

8. Color half of the rectangle blue.

9. Add.

$$3 + 1 + 2 = \underline{\quad}$$



10. Write the word form: 2 \_\_\_\_\_

11. Use 2 colors to make a pattern: ○ ○ ○ ○ ○ ○

12. Finish skip counting: 2, 4, 6, \_\_\_\_\_, \_\_\_\_\_

- سوال نمبر ۱۔ چار مشہور آسمانی کتابوں کے نام لکھیں۔
- سوال نمبر ۲۔ چار مشہور فرشتوں کے نام لکھیں۔
- سوال نمبر ۳۔ آخرت کی کامیابی کے لیے آپ جو کام کرتے ہیں فہرست بنائیں۔
- سوال نمبر ۴۔ نبی پاک ﷺ کی عادات کے بارے میں تین جملے لکھیں۔
- سوال نمبر ۵۔ کھانا کھانے کے تین آداب لکھیں۔
- سوال نمبر ۶۔ واقعات کے مطابق نبی ﷺ کی عمر مبارک تحریر کریں۔

- ۱۔ پیارے نبی ﷺ کے والد کی وفات۔
- ۲۔ پیارے نبی ﷺ کی والدہ کی وفات
- ۳۔ پیارے نبی ﷺ کے دادا کی وفات
- ۴۔ پیارے نبی ﷺ پر وحی نازل ہوئی
- ۵۔ پیارے نبی ﷺ کی شادی
- ۶۔ پیارے نبی ﷺ کی وفات
- سوال نمبر ۷۔ قرآن کے بارے میں معلومات مکمل کریں۔

	پہلی سورت کا نام
	آخری سورت کا نام
	سب سے چھوٹی سورت کا نام
	سب سے لمبی سورت کا نام
	۳۰
	۱۱۴

سوال نمبر ۸۔ حروف جوڑ کر کتاب کا نام مکمل کریں اور دی ہوئی جگہ میں لکھیں۔

\_\_\_\_\_

\_\_\_\_\_

\_\_\_\_\_

\_\_\_\_\_

۱۔ ت + و + ر + ا + ت

۲۔ ز + ب + و + ر

۳۔ ا + ن + ج + ی + ل

۴۔ ق + ر + آ + ن

سوال نمبر ۹۔ خانوں میں دیے ہوئے حروف کی مدد سے مشہور فرشتوں کے نام تلاش کر کے لکھیں۔

ل	س	ل	ی	ر	ب	ج
ع	ت	ک	ف	ا	ط	ع
ظ	ث	د	ن	ب	ز	پ
ص	ر	و	ض	ر	ھ	ح
ہ	ق	ذ	ا	چ	ٹ	م
ل	ی	ء	ا	ک	ی	م
ض	ی	غ	گ	ش	ے	آ
ل	ی	ف	ا	ر	س	ا

سوال نمبر ۱۰۔ اشارات کی مدد سے نبی کا نام بوجھ کر دائرے میں لکھیے۔

وقت کے بادشاہ

لوہے کی زرہیں

خوب صورت آواز

\_\_\_\_\_

جانوروں اور پرندوں کا تلاوت سُننا

زبور

زمین پر بھیجا جانا

جنت میں رہنا

پہلے نبی علیہ السلام


\_\_\_\_\_

انسانوں کی آبادی

حضرت حوا علیہا السلام



1. Make a map of Pakistan and tell the important features of neighbouring countries of Pakistan.
2. What is deforestation? What is global warming? How global warming is destroying our environment? Write a short description.
3. Which parts of plants are edible? Explain with examples. Make a booklet of edible parts of plants.
4. Search out the names of animals who take care of their young ones. Write how they take care of their babies? Name also few animals who don't take care of their young ones and tell how their young ones survive.
5. Why is it important to treat everyone with kindness and respect?
6. What is 3R policy? How is it helpful to our environment? What will happen if we don't follow 3R policy? Show by making a poster.
7. Recycle old things available at your home to make something new and bring it to your school.
8. What is water cycle? Make a project on water cycle.
9. The Water Cycle



What is happening in this picture? Use the words in the list to complete the sentences.


**heated   sun   clouds   rising   ocean   rain   cooling**

- i. The water in the ocean is being \_\_\_\_\_ by the hot \_\_\_\_\_.
- ii. The heated water is \_\_\_\_\_ into the air.
- iii. Up in the sky the water is \_\_\_\_\_ down. It is forming \_\_\_\_\_.
- iv. Water from the clouds is falling down as \_\_\_\_\_.
- v. Water is going back into the \_\_\_\_\_.

**10. How can we save water?**

Place of using water	How can be water wasted in this place?	How can we save water here?

**11. Group the animals based on their habitats.**



JUNGLE
1.
2.

OCEAN
3.
4.

MOUNTAIN
5.
6.

POLAR REGION
7.
8.

DESERT
9.
10.

1. Draw any four emotions in a circle and colour them.
2. Collect magazines, coloured paper, and scissors for a collage project. Cut out winter-related images and create a collage showcasing your favorite aspects of the winter season.