



MODERNAGE

ABBOTTABAD - PAKISTAN

A place to flourish, thrive & shine

WINTER HOMEWORK



Grade III



Website: www.maps.edu.pk

Modernage Public School & College, Abbottabad
Homework for Winter Break Class Three
Session 2024 – 25

Dear Parents/Guardians

Finally, Winter is here, signaling the end of the Academic session 2023 and start of a winter break.

We take great pleasure in announcing the successful culmination of the academic session 2023. Observing the continuous development and advancement of your child has been a source of immense satisfaction. To foster ongoing engagement with education during the holiday period, we are providing a comprehensive work pack comprising a multitude of enjoyable tasks and intellectually stimulating activities. Thank you for being an integral partner in your child's education. We eagerly anticipate another year of mutual growth and learning.

Dear Modernites!

Reflect on the achievements and lessons learned during the previous academic session. Complete the assigned exercises in your respective subjects, embracing the knowledge gained. Take a moment to chill and recharge during this winter break. Use the new year as a fresh start for academic goals and personal growth. Ensure neatness and organization in your work. We hope that you have cheerful and safe Winter vacation with your families.

The school will remain closed for winter vacation from **Sun, 24th December, 2023 till Sun 03rd March, 2024** and reopen on **Mon 04th March, 2024 In Sha Allah**.

Submit the completed assignment till 10th March 2024.

Looking forward to your cooperation. A copy of this homework is also available at the official webpage www.maps.edu.pk, the portal and app of Modernage.

Best Regards

Academic Coordinator






Happy New Year.

Note: Certificates will be awarded for extra ordinary efforts and complete homework. Each task carries 10 marks. Please use loose sheets for your assignments.

Note for the Students:

1. Read at least 2 story books of English and Urdu to enhance the reading skills and write the central idea and review of them. Write at least 50 new words from the story books that you have read.
2. Recite any poem with action from your book, make a video and share with your teacher.
3. Learn and write multiplication tables from 2 – 12 up to 12 times. Write each table 3 times on loose sheets.
4. Take a few pictures from newspapers or magazines, Cut and paste those pictures showing environmental issues. Write suggestions what will be your contribution towards resolving those issues.
5. Make sure to write one page in cursive every day. Learn the basic strokes using the link provided. https://youtu.be/6W4cfuvwsg0?si=LsubKr_viBn1CQPX

1. Write a paragraph describing a special moment or event, emphasizing the emotional impact through your choice of adjectives.
2. Create a poster sharing ideas for being kind to others.
3. Plan your dream vacation.
4. Write a list of words starting with the first letter of your name.
5. What would happen if everything switched and you were in charge of running the world?
 - i. What would you change?
 - ii. Would things be better or worse and why?
6. Create a mini-dictionary with new words you have learned.
7. Write a thank you note to your Grade 3 teacher.
8. Saad and Fahad went to the library to find the answers to their quiz sheet. Which books did they use?




Quiz Sheet

- Name the bird with a red breast.
- Which minibeast makes honey?
- Where does the Parliament meet?
- Which planets orbit the earth?
- Which large instrument is plucked?
- What is a yo-yo?
- What is a stallion?
- Which bird laid 'golden eggs'?



9. Describe the picture with help of given word box.



friends	happily	highest	stuck	Rescue
not to	climb	scared	broke	Regret

10. Do as directed

a. Use **is** or **are** to fill the gaps.

- i. Saman _____ not coming.
- ii. You _____ her best friend.
- iii. The turtle _____ swimming in the tank.
- iv. We _____ watching a horror movie.
- v. The children _____ trying to climb the rainbow.

b. Use **go** or **went** to fill the gaps.

- i. Tahir and Sami _____ to the cinema house last Saturday.
- ii. The cousins _____ to the park yesterday.
- iii. We have to _____ to school early today.
- iv. My parents _____ to Swat last summer.
- v. I can _____ to the market alone.

c. Use **saw** or **seen** to fill the gaps.

- i. Sara _____ a snake hanging down the tree trunk.
- ii. Have you _____ a living mammoth?
- iii. Nobody has _____ any fairies.
- iv. We _____ the tower of Pisa in Italy.
- v. This giraffe is the tallest animal. I have ever _____.

d. Use **did** or **done** to fill the gaps.

- i. I have _____ my work on paper.
- ii. She has _____ everything alone.
- iii. They _____ not attend the meeting.
- iv. Fahim _____ what he was told.
- v. You have _____ a good job.

11. Which biscuits do you like to eat? Bring a pack of your favourite biscuits. Read whatever is written on the pack and try to answer the following questions.

- i. What is the weight of the pack?
- ii. Are they with or without filling?
- iii. What does the pack of biscuits cost?
- iv. What flavour are they?
- v. What is the name of the company brand?

12. You and your friends are setting up a stall at the school fun fair. You will sell juices and cold drinks at your stall. Make a poster to tell people about it.

13. Listen to the English news on TV daily from Monday to Friday and write about at least 3 news that you have heard in your own words.

Spelling Bee List

essential	performance	colleagues	entrance	cuisine	passenger
participate	earthworms	glorious	infinitive	binary	introduce
satellite	lightning	orchestra	person	vacation	capsicums
rotation	refillable	crayon	different	fluent	stale
judgement	width	enhance	nationality	fluid	diamond
address	author	heaven	scissors	engineer	chop
independence	monster	glowing	narrate	fireworks	vegetables
role model	furious	gloomy	anonymous	wrinkles	spices
Munchkin	injured	dedication	waist	comprehension	narrow
announce	hexagon	incisor	burger	dialogue	embarrass
anesthesia	castle	happiness	Australia	bankrupt	spread
week	training	manners	hippopotamus	damage	toast
horrible	traditional	litter	powerless	eggplant	canoeing
wizard	pavement	Plain-field	mistakes	stomach	magpie
astronaut	market	vulture	harsh	storage	purpose
Korean	leather	software	kangaroo	reward	purpose
pulley	nylon	Mine-craft	bookcase	portrait	instructions
lever	echoing	finance	listening	continuous	crocodile
friction	expensive	education	seventeen	celebration	collective
attentive	exhausted	shoulder	euphoria	invention	howling
supernatural	invitation	bombing	umbrella	measurement	countable
whispering	hooves	decorate	annoyed	chopsticks	located
allergy	bullock	boring	Etiquette	richest	instrument
bored	mischievous	exile	helicopter	centimetre	zookeeper
independence	chef	narrow	system	glacier	courier
freedom	business	standard	exclamation	relieve	offering
citizenship	semester	bronze	habitat	enchanted	possessive
avocado	wrapped	conclusion	apostrophe	ostrich	interesting
fertile	university	nourish	drench	bulletin	scanning
community	beginning	monitor	crushed	famous	trunk
mountains	thunderstorm	peasant	drainpipe	subtraction	warmth
ballerina	catalogue	guide	biography	scorpion	information
butcher	trainers	exile	shellfish	webbed	unfortunate
awesome	mosque	cucumber	printing	prank	countries
bulletin	algebra	pumpkin	forgetful	heroes	language
newspaper	adventurous	patches	equipment	hatred	disagreement
Norway	bystander	balloon	sail	decorate	pigment
culture	tracksuit	nasty	microwave	deadline	torch
cabbage	conditioner	conquer	environment	zest	leader
minority	restaurant	zircon	verses	antonym	thunderstorm
cassette	adequate	inflation	valuable	suitable	assistance
fabulous	junction	aquarium	interview	possession	engineer
challenge	multiples	villa	companions	adorable	scanning

- سوال نمبر ۱۔ اپنے دوست کے نام خط لکھیں اور اسے چھٹیوں میں اپنے گھر آنے کی دعوت دیں۔
- سوال نمبر ۲۔ کسی سیاحتی مقام، پارک، باغ یا تاریخی مقام کی سیر کی ہے تو اس کی تفصیلات بتائیں۔ آپ کو اس مقام کی کون سی بات پسند آئی؟
- سوال نمبر ۳۔ اچھے شہری کی کم از کم دس خوبیاں تحریر کریں۔
- سوال نمبر ۴۔ کمپیوٹر زندگی کے ہر شعبے کی ضرورت بن چکا ہے۔ اس موضوع پر دو جملے لکھیں۔
- سوال نمبر ۵۔ علامہ اقبال کی نظموں میں سے اپنی پسندیدہ نظم کو کہانی کی صورت میں لکھیں۔ کہانی سے حاصل ہونے والا اخلاقی نتیجہ بھی تحریر کریں۔
- سوال نمبر ۶۔ خدمت خلق کیا ہے؟ اس موضوع پر کوئی کہانی لکھیں۔
- سوال نمبر ۷۔ ماحول کو صاف رکھنا ہم سب کا فرض ہے۔ اس عنوان پر مضمون تحریر کریں۔
- سوال نمبر ۸۔ دیے ہوئے اشاروں کی مدد سے اپنے پیارے وطن پاکستان کے بارے میں دو پیرا گراف لکھیں۔
- چار صوبے، قومی اور علاقائی زبانیں، مشہور کھانے، اسلام آباد، مقامی لباس، کراچی، کوئٹہ، پشاور، مظفر آباد گلگت۔
- سوال نمبر ۹۔ قومی ترانہ لکھیں اور زبانی یاد کریں۔
- سوال نمبر ۱۰۔ درج ذیل الفاظ کو حروف تہجی کے مطابق ترتیب دے کر لکھیے۔

ٹماٹر	شام	طرف	صاف	طوطا	پتّا	انگور	عید	بلی
دانت	وعدہ	راستہ	دروازہ	تتلی	دوات	غریب	تیر	ہاتھ
رستی	شمر	ڈھکن	جالی	قالین	فوارہ	کتاب	دور	ذائقہ
چوہا	گڑیا	زنجیر	خرگوش	جنگل	سانپ	حلوائی	ضائع	نمک

- سوال نمبر ۱۱۔ ہمیں اپنی غذا میں نمک، چکنائی، اور چینی کا استعمال کم کرنا چاہئے۔ ہمیں غذا میں فائبر اور کاربوہائیڈریٹس کا اضافہ کرنا چاہئے۔ درج ذیل کالموں میں ان غذاؤں کے نام لکھیں جنہیں زیادہ کھانا چاہئے اور ان غذاؤں کے نام لکھیں جنہیں کم کھانا چاہئے۔

وجوہات	کن غذاؤں کو زیادہ کھائیں
وجوہات	کن غذاؤں کو کم کھائیں

سوال نمبر ۱۲۔ دی گئی سرگرمی پڑھ کر مکمل کریں۔

انگریزی اعداد	اُردو اعداد	الفاظ	انگریزی اعداد	اُردو اعداد	الفاظ
3	۳	تین	18		
4					انہیں
		چھ	21		
	۸			۲۳	
9					چوبیس
	۱۱		25		
		بارہ		۲۷	
	۱۴		28		
		پندرہ		۲۹	
	۱۷				تیس

سوال نمبر ۱۳۔ واحد الفاظ کی درست جمع کے گرد دائرے کا نشان بنائیے۔

واحد	جمع	واحد	جمع
باغ	باغیں	روپیہ	روپے
کتاب	کتابتیں	ملک	ممالک
عمارت	عماراتیں	صفحہ	صفحات
شجر	شجریں	فرد	افراد
جذبہ	جذبات	شکل	اشکال

1. Write the numbers in expanded form:

a. 3233, b. 7386, c. 2381, d. 3785, e. 6742.

2. Add the following fraction:

a. $\frac{3}{16} + \frac{42}{6}$, b. $\frac{22}{5} + \frac{42}{5}$, c. $\frac{4}{6} + \frac{3}{6}$, d. $\frac{9}{12} + \frac{7}{12}$

3. Sana has 20 sweets. She wanted to share the sweet with her 4 friends equally. How many would each friend have?
4. The sides of an equilateral triangle measure 12cm. What is the perimeter of the triangle?
5. The musician started her practice routine at 10 o'clock and finished five hours later. What time did she finish?
6. Draw and compare 2D shapes with 3D shapes
7. It takes a rocket 7 seconds to travel a mile. How long would it take the rocket to go 2 miles at that speed?
8. Faraz is putting 42 eggs into boxes. Each box holds 6 eggs. How many boxes will he need to hold all eggs?
9. Solve the following questions.

a) 85 50 23 45 17 38
 $\times 24$ $\times 35$ $\times 18$ $\times 16$ $\times 32$ $\times 9$

b) i) 287 - 156. ii) 591-269. iii) 367-128. iv) 987- 323. v) 683 - 479

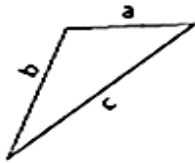
c) $5\sqrt{855}$, $6\sqrt{306}$, $7\sqrt{294}$, $3\sqrt{963}$

10. Solve and fill the boxes.

$3 \times 2 =$ <input type="text"/>	$6 \times 6 =$ <input type="text"/>	$9 \div 3 =$ <input type="text"/>	$18 \div 3 =$ <input type="text"/>
$5 \times 5 =$ <input type="text"/>	$8 \times 5 =$ <input type="text"/>	$7 \times 5 =$ <input type="text"/>	$10 \times 5 =$ <input type="text"/>
$2 \times 5 =$ <input type="text"/>	$2 \times 9 =$ <input type="text"/>	$15 \div 3 =$ <input type="text"/>	$21 \div 7 =$ <input type="text"/>
$3 \times 3 =$ <input type="text"/>	$8 \times 3 =$ <input type="text"/>	$6 \times 3 =$ <input type="text"/>	$9 \times 5 =$ <input type="text"/>
$4 \times 5 =$ <input type="text"/>	$4 \times 6 =$ <input type="text"/>	$24 \div 3 =$ <input type="text"/>	$63 \div 7 =$ <input type="text"/>
$5 \times 3 =$ <input type="text"/>	$5 \times 8 =$ <input type="text"/>	$4 \times 8 =$ <input type="text"/>	$4 \times 6 =$ <input type="text"/>
$7 \times 2 =$ <input type="text"/>	$10 \times 2 =$ <input type="text"/>	$56 \div 7 =$ <input type="text"/>	$56 \div 8 =$ <input type="text"/>
$3 \times 4 =$ <input type="text"/>	$3 \times 9 =$ <input type="text"/>	$4 \times 9 =$ <input type="text"/>	$8 \times 9 =$ <input type="text"/>
$6 \times 5 =$ <input type="text"/>	$6 \times 7 =$ <input type="text"/>	$32 \div 8 =$ <input type="text"/>	$54 \div 6 =$ <input type="text"/>
$3 \times 7 =$ <input type="text"/>	$3 \times 8 =$ <input type="text"/>	$5 \times 8 =$ <input type="text"/>	$3 \times 9 =$ <input type="text"/>
$4 \times 4 =$ <input type="text"/>	$7 \times 7 =$ <input type="text"/>	$40 \div 5 =$ <input type="text"/>	$45 \div 5 =$ <input type="text"/>
$8 \times 2 =$ <input type="text"/>	$9 \times 6 =$ <input type="text"/>	$8 \times 3 =$ <input type="text"/>	$9 \times 3 =$ <input type="text"/>
$4 \times 6 =$ <input type="text"/>	$8 \times 8 =$ <input type="text"/>	$24 \div 4 =$ <input type="text"/>	$24 \div 6 =$ <input type="text"/>
$7 \times 3 =$ <input type="text"/>	$7 \times 6 =$ <input type="text"/>	$6 \times 6 =$ <input type="text"/>	$8 \times 8 =$ <input type="text"/>
$5 \times 7 =$ <input type="text"/>	$9 \times 9 =$ <input type="text"/>	$20 \div 5 =$ <input type="text"/>	$81 \div 9 =$ <input type="text"/>

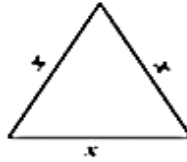
10. Identify each triangle based on sides (equilateral, isosceles, or scalene)

1)

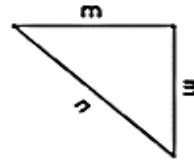


Scalene triangle

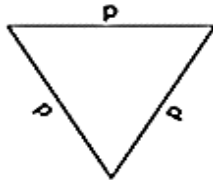
2)



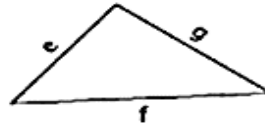
3)



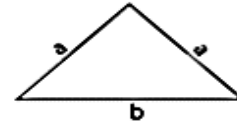
4)



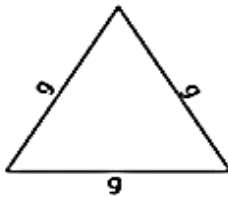
5)



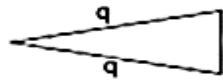
6)



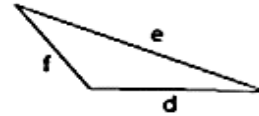
7)



8)



9)



11. Do as directed:

Write the number name

592 _____

686 _____

748 _____

824 _____

931 _____

792 _____

810 _____

637 _____

901 _____

766 _____

650 _____

845 _____

Write the numeral

Six hundred forty one _____

Seven hundred ten _____

Eight hundred eleven _____

Five hundred twenty three _____

Nine hundred sixteen _____

Eight hundred seven _____

Nine hundred seventy two _____

Five hundred thirty _____

Six hundred forty five _____

Seven hundred fourteen _____

Five hundred three _____

Eight hundred eighty _____

سوال نمبر ۱ ایک چارٹ پر سورۃ الاخلاص میں اللہ تعالیٰ کی جن صفات کا ذکر ہے وہ خوش خط تحریر کریں۔

سوال نمبر ۲- ارکان اسلام کے نام اور مختصر تعارف لکھیں۔

سوال نمبر ۳- اذان کے آداب تحریر کریں۔

سوال نمبر ۴- والدین کی مدد سے وضو کا طریقہ سیکھیں اور وضو کے آداب لکھیں۔

سوال نمبر ۵- سچ بولنے کے چند فوائد تحریر کریں۔

سوال نمبر ۶- نبی اکرم ﷺ کی عمر کے مطابق واقعات تحریر کریں۔

نبی اکرم ﷺ کی عمر مبارک

واقعات

- ۱- دائی حلیمہ کے پاس پرورش پائی۔
- ۲- والدہ ماجدہ کی وفات
- ۳- دادا کی وفات
- ۴- ملک شام کا سفر
- ۵- جنگِ فجار میں حصہ
- ۶- حضرت خدیجہ رضی اللہ عنہا سے شادی
- ۷- پہلی وحی نازل ہوئی۔
- ۸- چچا حضرت ابوطالب کی وفات
- ۹- نبی اکرم ﷺ کا انتقال


سوال نمبر ۷- پانچوں نمازوں کی رکعات کی تفصیل (فرض، سنت موکدہ، سنت غیر موکدہ، نوافل اور وتر) تحریر کریں۔

نام نماز	سنت موکدہ	سنت غیر موکدہ	فرض	نوافل	وتر	کل رکعتیں

سوال نمبر ۸۔ درست جواب کا انتخاب کر کے خالی جگہ پر کریں۔

- ۱۔ قرآن مجید میں _____ کو بہت بڑا ظلم قرار دیا گیا ہے۔ (جھوٹ، خیانت، وعدہ خلافی، شرک)
- ۲۔ توحید کے معنی _____ ہیں۔ (اقرار کرنا، یقین رکھنا، ایک ماننا، ایمان رکھنا)
- ۳۔ رسالت کا مطلب _____ ہے۔ (خبریں سننا، پیغام پہنچانا، خط لکھنا، ہدایت دینا)
- ۴۔ حج ہجری سال کے مہینے _____ میں ادا کیا جاتا ہے۔ (ذوالحجہ، شوال، رجب، ذیقعد)
- ۵۔ _____ سے مراد جسم کے چند اعضا کو ایک خاص ترتیب سے دھونا ہے۔ (طہارت، استنجا، تیمم، وضو)
- ۶۔ قرآن مجید میں نماز کے لیے _____ کا لفظ استعمال ہوا ہے۔ (الصُّوم، الصَّدَقَةُ، الصَّلَاةُ، الزُّكُوفَةُ)
- ۷۔ مسلمانوں کا قبلہ اول _____ تھا۔ (خانہ کعبہ، بیت المقدس، مسجد قبا، مسجد نبوی)
- ۸۔ بندوں کے حقوق میں سب سے پہلا حق _____ کا ہے۔ (والدین، استاد، دوستوں، رشتہ داروں)
- ۹۔ ابلیس ایک _____ تھا۔ (انسان، جن، فرشتہ، جانور)
- ۱۰۔ حضرت نوح علیہ السلام کو _____ کہا جاتا ہے۔ (خلیفہ الارض، آدم ثانی، کلیم اللہ، خلیل اللہ)

1. Search out any five inventions that have been invented by Muslim Scientists in last ten years. Write about these inventions, their inventors and the impact of inventions on life and paste pictures of the inventions as well.
2. Everyone must play their part to keep oneself and surroundings clean. It will develop a healthy society. You can educate others in this regard. Prepare a colourful flyer/ poster showing how much cleanliness is essential. You may also show the ways to keep oneself clean.
3. Draw pictures of five senses and tell how they help us to experience the world around us.
4. What is a balanced diet? Do you have a balance diet? Make a list of the foods you eat for each meal. Do you think you should eat less or more of any particular food? What might happen if you do not eat a balanced diet? What is the best way to live a healthy life?
5. Make a 3D model of various types of teeth, including incisors, molars, premolars and canines. Label each type and explain their specific functions in the process of chewing and maintaining a healthy bite.
6. What can we do to reduce water pollution?
Please watch this video for explanation of water cycle
<https://www.youtube.com/watch?v=s0bS-SBAGJI>
7. How can good citizens contribute and help the government to make the country a better place?
8. Match the machines with its names.



rocket

drill

hammer

trowel

television

car

pencil sharpener

1. Draw Islamic motifs in 2D shape and colour them.
2. Draw your dream winter home, incorporating elements like snow-covered roofs, smoke coming from chimneys, and cozy windows. You can add details like icicles hanging from the leaves or snow-covered gardens.