



# MODERNAGE

## PAKISTAN

*A place to flourish, thrive & shine*

## WINTER HOMEWORK



# Grade III



Website: [www.maps.edu.pk](http://www.maps.edu.pk)

**Modernage Public School & College, Pakistan**  
**Homework for Winter Break Class Three**  
**Session 2025 – 26**

**Dear Parents/Guardians**

Finally, Winter is here, signaling the end of the Academic session 2024 and start of a winter break.

We take great pleasure in announcing the successful culmination of the academic session 2024. Observing the continuous development and advancement of your child has been a source of immense satisfaction. To foster ongoing engagement with education during the holiday period, we are providing a comprehensive work pack comprising a multitude of enjoyable tasks and intellectually stimulating activities. Thank you for being an integral partner in your child's education. We eagerly anticipate another year of mutual growth and learning.

**Dear Modernites!**

Reflect on the achievements and lessons learned during the previous academic session. Complete the assigned exercises in your respective subjects, embracing the knowledge gained. Take a moment to chill and recharge during this winter break. Use the new year as a fresh start for academic goals and personal growth. Ensure neatness and organization in your work. We hope that you have cheerful and safe Winter vacation with your families.

The school will remain closed for winter vacation from **Thurs, 18<sup>th</sup> December, 2024 till Sun 02<sup>nd</sup> March, 2025** and reopen on **Mon 03<sup>rd</sup> March, 2025 In Sha Allah**.

Submit the completed assignment till 10<sup>th</sup> March 2025.

Looking forward to your cooperation. A copy of this homework is also available at the official webpage [www.maps.edu.pk](http://www.maps.edu.pk), the portal and app of Modernage.

**Best Regards**

**Academic Coordinator**

Happy New Year.

**Note:** Certificates will be awarded for extra ordinary efforts and complete homework. Each task carries 10 marks. Please use loose sheets for your assignments.

**Note for the Students:**

1. Read at least 2 story books of English and Urdu to enhance the reading skills and write the central idea and review of them. Write at least 50 new words from the story books that you have read.
2. Recite any poem with action from your book, make a video and share with your teacher.
3. Learn and write multiplication tables from 2 – 12 up to 12 times. Write each table 3 times on loose sheets.
4. Take a few pictures from newspapers or magazines, Cut and paste those pictures showing environmental issues. Write suggestions what will be your contribution towards resolving those issues.
5. Make sure to write one page in cursive every day. Learn the basic strokes using the link provided. [https://youtu.be/6W4cfuvwsg0?si=LsubKr\\_viBn1CQPX](https://youtu.be/6W4cfuvwsg0?si=LsubKr_viBn1CQPX)

1. Write a paragraph describing a special moment or event, emphasizing the emotional impact through your choice of adjectives. This could include a memorable birthday celebration, a family vacation, a trip to a museum or zoo, or any other experience that evokes strong feelings of happiness and joy.
2. Write a short story about a day when you made healthy choices. What did you eat for breakfast? Did you play outside? What did you do to take care of your body?
3. Write a heartfelt thank-you note or create a handmade card for your Grade 3 teacher!

Make it extra special by including:

- i. A favorite memory from the school year
- ii. A drawing or picture that represents your favorite subject or activity
- iii. A personal message expressing your gratitude for your teacher's guidance and support

**Share the Joy:** When you return to school in the month of March 2025, present your teacher with the special thank-you note or card!

4. **Read the text and answer the given questions:**

#### Olive Oil: From the Tree to Your Table

Do you know where olive oil comes from? It comes from olives that grow on trees! Farmers have been growing olive trees for over 6,000 years. Olives grow in special countries like Spain, Italy, and Greece. These countries make most of the world's olive oil. Farmers pick the olives from the trees and take them to a special place to make olive oil.

Making olive oil is a fun process! First, the olives are squished into a yummy paste. Then, the paste is stirred and pressed to get the oil out. Some people still make olive oil the old-fashioned way, but many use machines to help. After the olive oil is made, it's put into bottles and sent to stores all around the world. You can find olive oil in your local supermarket! There are different kinds of olive oil, but extra virgin olive oil is super yummy and good for you.

So, next time you're at the store with your parents, ask them to buy some olive oil. You can use it to make yummy food, like pizza or salad!

Here are the questions categorized into two parts:

#### **Fun Facts: Write Your Answers!**

1. Where do olives grow?
2. How long have farmers been growing olive trees?

3. Which countries make most of the world's olive oil?
4. What are some other ways to use olive oil besides cooking?

### Creative Corner: Show Your Imagination!

1. Why do you think olive oil is good for us? Write a short paragraph and draw a picture!
2. Imagine you're an olive farmer! Write a short paragraph about your daily routine.
3. Create a yummy recipe using olive oil! Write down the ingredients and instructions, and draw a picture of the dish!
5. Saad and Fahad went to the library to find the answers to their quiz sheet. Which books did they use?




### Quiz Sheet

- i. Name the bird with a red breast.
- ii. Which mini beast makes honey?
- iii. Where does the parliament meet?
- iv. Which planets orbit the earth?
- v. Which large instrument is plucked?
- vi. What is yoyo?
- vii. What is a Stallion?
- viii. Which bird laid golden eggs?





6. Which biscuits do you like to eat? Bring a pack of your favourite biscuits. Read whatever is written on the pack and try to answer the following questions.
- What is the weight of the pack?
  - Are they with or without filling?
  - What does the pack of biscuits cost?
  - What flavour are they?
  - What is the name of the company brand?
7. You and your friends are setting up a stall at the school fun fair. You will sell juices and cold drinks at your stall. Make a poster to tell people about it.
8. Describe the picture.



9. Do as directed
- Use **is** or **are** to fill the gaps.
    - Saman \_\_\_\_\_ not coming.
    - You \_\_\_\_\_ her best friend.
    - The turtle \_\_\_\_\_ swimming in the tank.
    - We \_\_\_\_\_ watching a horror movie.
    - The children \_\_\_\_\_ trying to climb the rainbow.

b. Use **go** or **went** to fill the gaps.

- i. Tahir and Sami \_\_\_\_\_ to the cinema house last Saturday.
- ii. The cousins \_\_\_\_\_ to the park yesterday.
- iii. We have to \_\_\_\_\_ to school early today.
- iv. My parents \_\_\_\_\_ to Swat last summer.
- v. I can \_\_\_\_\_ to the market alone.

c. Use **saw** or **seen** to fill the gaps.

- i. Sara \_\_\_\_\_ a snake hanging down the tree trunk.
- ii. Have you \_\_\_\_\_ a living mammoth?
- iii. Nobody has \_\_\_\_\_ any fairies.
- iv. We \_\_\_\_\_ the tower of Pisa in Italy.
- v. This giraffe is the tallest animal. I have ever \_\_\_\_\_

d. Use **did** or **done** to fill the gaps.

- i. I have \_\_\_\_\_ my work on paper.
- ii. She has \_\_\_\_\_ everything alone.
- iii. They \_\_\_\_\_ not attend the meeting.
- iv. Fahim \_\_\_\_\_ what he was told.
- v. You have \_\_\_\_\_ a good job.

**10.** Listen to the English news on TV daily from Monday to Friday and write about at least 3 news that you have heard in your own words.

**Class: III****Spelling Bee List, 2025****Subject: English**

abilities	celebration	effort	hatred	mischievous	reward
accept	ceremony	engineer	happiness	medicines	stale
addition	character	equipment	hitching	mysterious	subtraction
address	chalet	especially	horrible	mountains	spices
adequate	climate	essential	hovered	magpie	scissors
adorable	colleague	exactly	hospital	monitor	sensitive
adventurous	communicate	expedition	honesty	naughty	session
afraid	competition	enhance	heaven	nylon	shovel
allergy	conserve	embarrass	howling	noisily	shutter
alligator	consequently	entrance	harsh	Neptune	skeleton
ambulance	confidence	echoing	habitat	narrate	slogan
amusing	cruelty	exhausted	injured	narrow	splashing
annoyed	curious	equipment	incisor	nationality	surfing
anonymous	capsicums	etiquette	infinitive	nasty	swallowed
ankle	crayon	environment	introduce	nourish	swiftly
apostrophe	canoeing	exclamation	invention	Olympic	stomach
arithmetic	collective	enchanted	invitation	operation	technique
ascent	crocodile	fable	inflation	orbit	toast
assistance	continuous	fastened	identical	original	tentacles
astronaut	courier	furious	imagine	orchestra	taekwondo
athletics	cassette	festivities	incomparable	ostrich	tortoise
aquarium	cabbage	feminine	inedible	portrait	treasure
attentive	castle	frightened	instructor	purpose	trousers
avocado	carnival	foreigners	instructions	passenger	thunderstorm
antonym	challenge	fossils	invisible	powerless	unique
attice	community	freezer	interesting	pigment	unfortunately
Australian	conclusion	fabulous	jiggled	possessive	unscrewed
author	companion	freedom	jerking	peasant	university
autumn	comprehension	fertile	junction	possession	villians
ballerina	cuisine	famous	kangaroo	panther	vocabulary
bulletin	conquer	finance	knight	passion	volcanoes
butcher	citizenship	ghost	knowledge	patrol	valuable
business	conditioner	giraffe	language	pentagon	vulture
bungalow	catalogue	gleaming	listening	physically	vacation
beginning	cabin	gravel	leather	poisonous	verses
bronze	dialogue	grizzly	latter	pollution	vaccination
bombing	dramatically	geography	limousine	population	worried
bad -tempered	disaster	glorious	loneliness	promptly	weight
bamboo	discovered	glowing	located	practices	wrapped
bankrupt	dismissed	guidance	lightning	quarter	webbed
barbecue	domesticated	glacier	monster	queuing	whistle
biography	drowsy	hippopotamus	minority	refillable	warmth
blouses	dedication	haunt	measurement	reception	whispered
bored	disagreement	headache	magazine	recognize	wickedness
boutique	decorate	hermione	marriage	reassure	wrinkle
breeze	dengue	hesitated	marshes	revenge	yogurt
bubble	diamond	hibernation	masculine	rhinoceros	zest
buffaloes	drainpipe	patches	machine	rubbish	zircon

- سوال نمبر 1- اپنے دوست کو چھٹیوں میں کسی صحت افزا مقام پر جانے کے لئے دعوت دینے کا خط لکھیں۔
- سوال نمبر 2- کسی سیاحتی مقام، پارک، باغ یا تاریخی مقام کی سیر کی ہے تو اس کی تفصیلات بتائیں۔ آپ کو اس مقام کی کون سی بات پسند آئی؟
- سوال نمبر 3- اچھے شہری کی کم از کم دس خوبیاں تحریر کریں۔
- سوال نمبر 4- کمپیوٹر زندگی کے ہر شعبے کی ضرورت بن چکا ہے۔ اس موضوع پر دو جملے لکھیں۔
- سوال نمبر 5- علامہ اقبال کی نظموں میں سے اپنی پسندیدہ نظم کو کہانی کی صورت میں لکھیں۔ کہانی سے حاصل ہونے والا اخلاقی نتیجہ بھی تحریر کریں۔
- سوال نمبر 6- خدمت خلق کیا ہے؟ اس موضوع پر کوئی کہانی لکھیں۔
- سوال نمبر 7- جب آپ کسی ایسی جگہ جاتے ہیں جہاں بہت سے پودے اور درخت لگے ہوں، مثلاً کھیت، باغ، پارک تو آپ کو کیسا محسوس ہوتا ہے؟ ایک پیرا گراف تحریر کریں۔
- سوال نمبر 8- دیے ہوئے اشاروں کی مدد سے پانی کی اہمیت و ضرورت کے بارے میں دو پیرا گراف لکھیں۔
- اشارات: عظیم نعمت۔ بنیادی ضرورت۔ زمین کا تین چوتھائی حصہ۔ تین فیصد انسانوں کے لیے۔ کوئی جاندار زندہ نہیں۔ اللہ نے ہر چیز پانی سے۔ زمین پر زندگی۔ جسم میں خوراک کی ترسیل۔ آٹھ سے دس گلاس پانی۔ گردوں کو صاف۔ انسانی جسم میں دو تہائی پانی۔ جانداروں کی بقا کا دار و مدار۔ زمینیں سرسبز و شاداب۔ باغون میں پھول۔ اگر پانی نہ ہو تو۔ قدر کرنا۔ ضائع نہ کرنا۔
- سوال نمبر 9- قومی ترانہ لکھیں اور زبانی یاد کریں۔
- سوال نمبر 10- درج ذیل الفاظ کو حروف تہجی کے مطابق ترتیب دے کر لکھیے۔

بلی	عید	انگور	پتّا	طوطا	صاف	طرف	شام	ٹماٹر
ہاتھ	تیر	غریب	دوات	تتلی	دروازہ	راستہ	وعدہ	دانت
ذائقہ	دور	کتاب	فوارہ	قالین	جالی	ڈھکن	شمر	رستی
نمک	ضائع	حلوائی	سانپ	جنگل	خرگوش	زنجیر	گڑیا	چوہا



سوال نمبر 11- ہمیں اپنی غذا میں نمک، چکنائی، اور چینی کا استعمال کم کرنا چاہئے۔ ہمیں غذا میں فائبر اور کاربوہائیڈریٹس کا اضافہ کرنا چاہئے۔ درج ذیل کالموں میں ان غذاؤں کے نام لکھیں جنہیں زیادہ کھانا چاہئے اور ان غذاؤں کے نام لکھیں جنہیں کم کھانا چاہئے۔

کن غذاؤں کو زیادہ کھائیں	وجوہات
کن غذاؤں کو کم کھائیں	وجوہات

سوال نمبر 12- دی گئی سرگرمی پڑھ کر مکمل کریں۔

انگریزی اعداد	اُردو اعداد	الفاظ	انگریزی اعداد	اُردو اعداد	الفاظ
3	۳	تین	18		
4					آئیں
		پچھ	21		
	۸			۲۳	
9					چوبیس
	۱۱		25		
		بارہ		۲۷	
	۱۳		28		
		پندرہ		۲۹	
	۱۷				تیس

سوال نمبر 13- واحد الفاظ کی درست جمع کے گرد دائرے کا نشان بنائیے۔

واحد	جمع	واحد	جمع
باغ	باغیں	روپیہ	روپیاں
کتاب	کتابتیں	ملک	ممالک
عمارت	عماراتیں	صفحہ	صفحات
شجر	شجریں	فرد	افراد
جذبہ	جذبات	شکل	اشکال

1. Write the numbers in expanded form:

a. 6243,                      b. 8384,                      c. 9381,                      d. 3325,                      e. 6643

2. Write the number names.

i. 3,851,                      ii. 76,926,                      iii. 53,242,                      iv. 39,715                      v. 10,112

3. Write in numerals.

Number name	Numeral
i. Two hundred and forty-one	
ii. Two hundred and forty-one	
iii. Four thousand, three hundred and sixty-five	
iv. Eighty-five thousand, four hundred and ninety-three	
v. Thirty-nine thousand, five hundred and eleven	
vi. Ninety-three thousand, one hundred and eighteen	
vii. Ten thousand, two hundred and two	
viii. Forty-seven thousand and seventy-seven	
ix. Eighty thousand and three	
x. Five thousand, four hundred and ninety-three	

4. Add the following fraction:

a.  $\frac{6}{8} + \frac{6}{8}$ ,                      b.  $\frac{22}{5} + \frac{42}{5}$ ,                      c.  $\frac{4}{6} + \frac{3}{6}$ ,                      d.  $\frac{9}{12} + \frac{7}{12}$

e.  $\frac{1}{7} + \frac{1}{7}$ ,                      f.  $\frac{3}{11} + \frac{4}{11}$ ,                      g.  $\frac{2}{13} + \frac{10}{13}$ ,                      h.  $\frac{4}{6} + \frac{1}{6}$

5. Mathematical Explorations: A Field Trip to Wonderland

i. The students from Modernage Public School are going on a field trip to Wonderland. They need to ride buses to get there. If there are 5 buses and each bus has 2 teachers, how many teachers are there in total?

ii. Each bus has 8 rows of seats and each row can accommodate 4 children. How many children can each bus accommodate?

iii. At Wonderland, the students played on 4 different swings, and each swing had 6 seats. How many seats were there in total?

iv. The students also saw 4 types of slides in each section of the wonderland. If the wonderland has 2 sections, how many types of slides did the students see?

v. Their last stop was the Taxila Museum. They went through 5 exhibits, spending 8 minutes in each exhibit. Write an equation to calculate how much time they spent going through the museum.

6. Solve these sums.

i. Ali has 18 pencils to share equally among 3 groups of students. How many pencils will each group get?

ii. Sara has 12 apples to put into baskets for a fruit salad. If she wants to put 4 apples in each basket, how many baskets can she fill?

iii. Khalid has 12 books on his bookshelf. He buys 9 more books at the bookstore. How many books does Khalid have now?

iv. Jamilah has 20 stickers in her sticker book. She gives 8 stickers to her brother, Amir. How many stickers does Jamilah have left?

### 7. Solve:

i.  $(11 - 4) - 3$ ,    ii.  $2 + (12 - 1)$ ,    iii.  $6 - 3 + 7$ ,    iv.  $14 - (17 - 5)$ ,    v.  $15 - (7 + 2)$

### 8. Solve and fill the boxes.

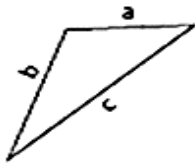
$3 \times 2 =$ <input type="text"/>	$6 \times 6 =$ <input type="text"/>	$9 \div 3 =$ <input type="text"/>	$18 \div 3 =$ <input type="text"/>
$5 \times 5 =$ <input type="text"/>	$8 \times 5 =$ <input type="text"/>	$7 \times 5 =$ <input type="text"/>	$10 \times 5 =$ <input type="text"/>
$2 \times 5 =$ <input type="text"/>	$2 \times 9 =$ <input type="text"/>	$15 \div 3 =$ <input type="text"/>	$21 \div 7 =$ <input type="text"/>
$3 \times 3 =$ <input type="text"/>	$8 \times 3 =$ <input type="text"/>	$6 \times 3 =$ <input type="text"/>	$9 \times 5 =$ <input type="text"/>
$4 \times 5 =$ <input type="text"/>	$4 \times 6 =$ <input type="text"/>	$24 \div 3 =$ <input type="text"/>	$63 \div 7 =$ <input type="text"/>
$5 \times 3 =$ <input type="text"/>	$5 \times 8 =$ <input type="text"/>	$4 \times 8 =$ <input type="text"/>	$4 \times 6 =$ <input type="text"/>
$7 \times 2 =$ <input type="text"/>	$10 \times 2 =$ <input type="text"/>	$56 \div 7 =$ <input type="text"/>	$56 \div 8 =$ <input type="text"/>
$3 \times 4 =$ <input type="text"/>	$3 \times 9 =$ <input type="text"/>	$4 \times 9 =$ <input type="text"/>	$8 \times 9 =$ <input type="text"/>
$6 \times 5 =$ <input type="text"/>	$6 \times 7 =$ <input type="text"/>	$32 \div 8 =$ <input type="text"/>	$54 \div 6 =$ <input type="text"/>
$3 \times 7 =$ <input type="text"/>	$3 \times 8 =$ <input type="text"/>	$5 \times 8 =$ <input type="text"/>	$3 \times 9 =$ <input type="text"/>
$4 \times 4 =$ <input type="text"/>	$7 \times 7 =$ <input type="text"/>	$40 \div 5 =$ <input type="text"/>	$45 \div 5 =$ <input type="text"/>
$8 \times 2 =$ <input type="text"/>	$9 \times 6 =$ <input type="text"/>	$8 \times 3 =$ <input type="text"/>	$9 \times 3 =$ <input type="text"/>
$4 \times 6 =$ <input type="text"/>	$8 \times 8 =$ <input type="text"/>	$24 \div 4 =$ <input type="text"/>	$24 \div 6 =$ <input type="text"/>
$7 \times 3 =$ <input type="text"/>	$7 \times 6 =$ <input type="text"/>	$6 \times 6 =$ <input type="text"/>	$8 \times 8 =$ <input type="text"/>
$5 \times 7 =$ <input type="text"/>	$9 \times 9 =$ <input type="text"/>	$20 \div 5 =$ <input type="text"/>	$81 \div 9 =$ <input type="text"/>

### 9. Solve

$\begin{array}{r} 501 \\ + 803 \\ \hline \end{array}$	$\begin{array}{r} 538 \\ - 523 \\ \hline \end{array}$	$\begin{array}{r} 918 \\ - 871 \\ \hline \end{array}$	$\begin{array}{r} 163 \\ + 514 \\ \hline \end{array}$	$\begin{array}{r} 279 \\ + 839 \\ \hline \end{array}$
$\begin{array}{r} 534 \\ + 951 \\ \hline \end{array}$	$\begin{array}{r} 107 \\ + 271 \\ \hline \end{array}$	$\begin{array}{r} 691 \\ + 832 \\ \hline \end{array}$	$\begin{array}{r} 821 \\ + 325 \\ \hline \end{array}$	$\begin{array}{r} 520 \\ - 355 \\ \hline \end{array}$
$\begin{array}{r} 539 \\ + 899 \\ \hline \end{array}$	$\begin{array}{r} 995 \\ - 446 \\ \hline \end{array}$	$\begin{array}{r} 820 \\ + 178 \\ \hline \end{array}$	$\begin{array}{r} 597 \\ - 520 \\ \hline \end{array}$	$\begin{array}{r} 804 \\ - 744 \\ \hline \end{array}$
$\begin{array}{r} 831 \\ - 445 \\ \hline \end{array}$	$\begin{array}{r} 929 \\ - 820 \\ \hline \end{array}$	$\begin{array}{r} 889 \\ - 124 \\ \hline \end{array}$	$\begin{array}{r} 667 \\ + 847 \\ \hline \end{array}$	$\begin{array}{r} 967 \\ - 899 \\ \hline \end{array}$
$\begin{array}{r} 985 \\ + 606 \\ \hline \end{array}$	$\begin{array}{r} 457 \\ - 309 \\ \hline \end{array}$	$\begin{array}{r} 595 \\ + 215 \\ \hline \end{array}$	$\begin{array}{r} 966 \\ - 246 \\ \hline \end{array}$	$\begin{array}{r} 348 \\ - 199 \\ \hline \end{array}$

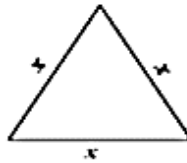
**10. Identify each triangle based on sides (equilateral, isosceles, or scalene)**

1)



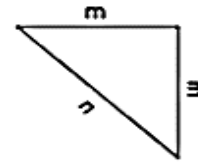
Scalene triangle

2)



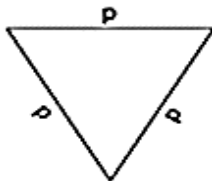
\_\_\_\_\_

3)



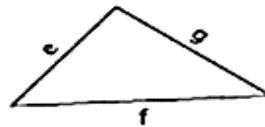
\_\_\_\_\_

4)



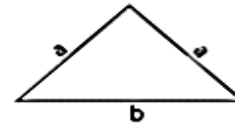
\_\_\_\_\_

5)



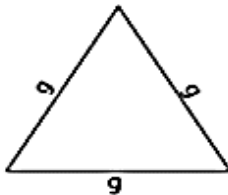
\_\_\_\_\_

6)



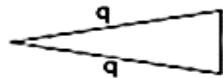
\_\_\_\_\_

7)



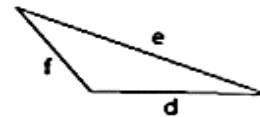
\_\_\_\_\_

8)



\_\_\_\_\_

9)



\_\_\_\_\_

**11. Read the Calendar and answer the questions according to the calendar.**

December						
Sun	Mon	Tue	Wed	Thur	Fri	Sat
30	1	2	3	4	5	6
7	8	9	10	11	12	13
14	15	16	17	18	19	20
21	22	23	24	25	26	27
28	29	30	31	1	2	3

- i. What day of the week is Quaid's Day? \_\_\_\_\_
- ii. Winter break will start 4 days before Quaid's Day Eve. What is the date of the first day of the winter break? \_\_\_\_\_
- iii. Sara is hosting a party on the Saturday between Quaid's Day and New Year's Eve. What is the date for the party? \_\_\_\_\_
- iv. Sara sent the invitation for the party 5 days before Quaid's Day. What day is it? \_\_\_\_\_
- v. What day of the week is December 21st? \_\_\_\_\_
- vi. What is the date of the third Saturday of December? \_\_\_\_\_
- vii. What is the date of the second Thursday of December? \_\_\_\_\_
- viii. How many Sundays are there in December? \_\_\_\_\_
- ix. How many Wednesdays are there in December? \_\_\_\_\_
- x. How many days are in December? \_\_\_\_\_

سوال نمبر 1 ایک چارٹ پر سورۃ الاخلاص میں اللہ تعالیٰ کی جن صفات کا ذکر ہے وہ خوش خط تحریر کریں۔

سوال نمبر 2- ارکان اسلام کے نام اور مختصر تعارف لکھیں۔

سوال نمبر 3- اذان کے آداب تحریر کریں۔

سوال نمبر 4- والدین کی مدد سے وضو کا طریقہ سیکھیں اور وضو کے آداب لکھیں۔

سوال نمبر 5- سچ بولنے کے چند فوائد تحریر کریں۔

سوال نمبر 6- نبی اکرم ﷺ کی عمر کے مطابق واقعات تحریر کریں۔

نبی اکرم ﷺ کی عمر مبارک

واقعات

- 1- دائی حلیمہ کے پاس پرورش پائی۔
- 2- والدہ ماجدہ کی وفات
- 3- دادا کی وفات
- 4- ملک شام کا سفر
- 5- جنگِ فجار میں حصہ
- 6- حضرت خدیجہ رضی اللہ عنہا سے شادی
- 7- پہلی وحی نازل ہوئی۔
- 8- چچا حضرت ابوطالب کی وفات
- 9- نبی اکرم ﷺ کا انتقال

سوال نمبر 7- پانچوں نمازوں کی رکعات کی تفصیل (فرض، سنت موکدہ، سنت غیر موکدہ، نوافل اور وتر) تحریر کریں۔

نام نماز	سنت موکدہ	سنت غیر موکدہ	فرض	نوافل	وتر	کل رکعتیں

سوال نمبر 8- درست جواب کا انتخاب کر کے خالی جگہ پر کریں۔

- 1- قرآن مجید میں \_\_\_\_\_ کو بہت بڑا ظلم قرار دیا گیا ہے۔  
جھوٹ، خیانت، وعدہ خلافی، شرک
- 2- توحید کے معنی \_\_\_\_\_ ہیں۔  
اقرار کرنا، یقین رکھنا، ایک ماننا، ایمان رکھنا
- 3- رسالت کا مطلب \_\_\_\_\_ ہے۔  
خبریں سننا، پیغام پہنچانا، خط لکھنا، ہدایت دینا
- 4- حجِ بصری سال کے مہینے \_\_\_\_\_ میں ادا کیا جاتا ہے۔  
ذوالحجہ، شوال، رجب، ذیقعد
- 5- \_\_\_\_\_ سے مراد جسم کے چند اعضا کو ایک خاص ترتیب سے دھونا ہے۔  
طہارت، استنجا، تیمم، وضو
- 6- قرآن مجید میں نماز کے لیے \_\_\_\_\_ کا لفظ استعمال ہوا ہے۔  
الصُّمُومُ، الصَّدَقَةُ، الصَّلَاةُ، الزُّكُوفَةُ
- 7- مسلمانوں کا قبلہ اول \_\_\_\_\_ تھا۔  
خانہ کعبہ، بیت المقدس، مسجد قبا، مسجد نبوی
- 8- بندوں کے حقوق میں سب سے پہلا حق \_\_\_\_\_ کا ہے۔  
والدین، استاد، دوستوں، رشتہ داروں
- 9- ابلیس ایک \_\_\_\_\_ تھا۔  
انسان، جن، فرشتہ، جانور
- 10- حضرت نوح علیہ السلام کو \_\_\_\_\_ کہا جاتا ہے۔  
خلیفہ الارض، آدم ثانی، کلیم اللہ، خلیل اللہ



سوال 9 - احادیث بمعہ ترجمہ زبانی یاد کریں

۱- مَنْ لَمْ يَشْكُرِ النَّاسَ لَمْ يَشْكُرِ اللَّهَ

ترجمہ: جو شخص لوگوں کا شکر ادا نہیں کرتا وہ اللہ تعالیٰ کا شکر بھی نہیں ادا کرتا۔  
(جامع ترمذی: ۱۹۵۵)

۲- لَا يَدْخُلُ الْجَنَّةَ قَتَاتٌ

ترجمہ: چُغَل خور جنت میں نہ جائے گا۔ (صحیح بخاری: ۲۹۱)

۳- لَا يَزِيحُ اللَّهُ مَنْ لَا يَزِيحُ النَّاسَ

ترجمہ: اللہ تعالیٰ اس پر رحم نہیں فرماتے جو لوگوں پر رحم نہیں کرتا۔ (صحیح بخاری: ۷۳۷۶)

۴- إِنَّ مِنْ أَحَبِّكُمْ إِلَيَّ أَحْسَنَكُمْ أَخْلَاقًا

ترجمہ: تم میں سے وہ شخص میرے نزدیک زیادہ محبوب ہے جو زیادہ خلیق (بااخلاق) ہے۔ (صحیح بخاری: ۳۷۵۹)

۵- لَا يَدْخُلُ الْجَنَّةَ مَنْ لَا يَأْمَنُ جَارُكَ بَوَائِقَهُ

ترجمہ: وہ شخص جنت میں نہ جائے گا جس کا پڑوسی اس کی ایذاؤں سے محفوظ نہ رہے۔ (صحیح مسلم: ۱۷۲)


1. Draw pictures of five senses and tell how they help us to experience the world around us.
2. To change things, we often use heat. Find out what happens to certain things when you heat them. Does the size change? Does the color and texture change? Record the result in a table.

Substance	Method of heating	Changes brought
egg		
water		
sugar		
milk		

3. What can we do to reduce water pollution?  
Please watch this video for explanation of water cycle.  
<https://www.youtube.com/watch?v=s0bS-SBAgJI>
4. Which loud voices/noises are you exposed to where you live? How can you reduce noise pollution?
5. On a map of world or globe, find the names of all the continents.
6. Collect the labels from food packets. Paste them in a small chart. Read the labels carefully. Find out what is in the food and whether or not they are good for your body.
7. Why is cleanliness important for personal health and society? List at least five simple steps people can take to stay clean and keep public spaces tidy.
8. Make a 3D model of various types of teeth, including incisors, molars, premolars and canines. Label each type and explain their specific functions in the process of chewing and maintaining a healthy bite.
9. Measure the temperature every day for a week and observe weather conditions.

Week days	Temperature	Rain	Wind
Monday			
Tuesday			
Wednesday			
Thursday			
Friday			
Saturday			
Sunday			

10. Match the machines with its names.



rocket

drill

hammer

trowel

television

car

pencil sharpener

1. Draw a winter landscape scene including snow covered trees and snow-flakes in the sky.
2. Take an A4 or letter-sized picture of a polar bear, paste cotton balls or white pom-poms to create a fluffy fur effect, use black buttons or beads to create cute, shiny eyes.  
Add any additional embellishments, like a red scarf or a snowflake-patterned hat.